
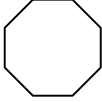

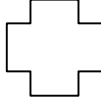
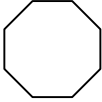

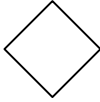



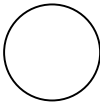
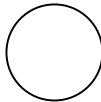

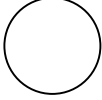
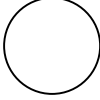
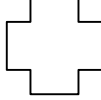



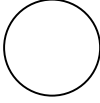
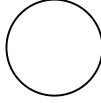
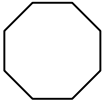


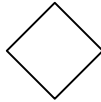

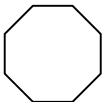


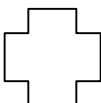

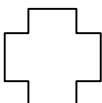
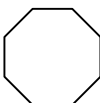
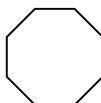
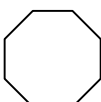


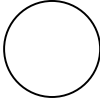



Symbols are substituted for single digits in these addition equations.  
 The same symbol represents the same digit throughout each puzzle. There are two different puzzles per page.  
 The same digit cannot be represented by more than one different symbol.  
 Don't forget to carry and count the extra tens if needed..! There could possibly be more than one solution..  
**Work out the puzzle by supplying the missing numbers on the symbols and supply the puzzles' total.**


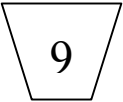

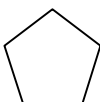
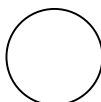
				
				
				
+				

---

		,			
--	--	---	---	--	--

					
					
					
+					

---

		,			
---	---	---	--	---	---